



# Missing Number Story Problems



Name \_\_\_\_\_

Mike's mom gave him some candy kisses to share. He gave 3 to Beth, 4 to Joe, and he kept 5 for himself. How many candy kisses did Mike's mom give him?



Draw it out.

Write the equation.

Write the solution.

20 kids went on a bus trip to the zoo. Some of the kids ate lunch on the bus. 8 kids ate lunch on the grass. How many kids ate lunch on the bus?



Draw it out.

Write the equation.

Write the solution.

Name \_\_\_\_\_

Jill loves to read! She got some books from the library. She read 2 on Monday, 3 on Tuesday, and 2 on Wednesday. How many books did she get at the library?



Draw it out.

Write the equation.

Write the solution.

Dan likes to make clay animals. He made 3 snakes, 2 sharks, and some tigers. He has 9 animals all together. How many tigers did he make?



Draw it out.

Write the equation.

Write the solution.

Name \_\_\_\_\_

Ava and her friends collect shells. They have some blue ones, 6 yellow ones, and 5 pink ones. They have 14 shells in their collection. How many of them are blue?



Draw it out.

Write the equation.

Write the solution.

Bob wants make posters for Earth Day. He made 4 about litter, 4 about saving water, and some about recycling. He has 12 in all. How many are about recycling?




Draw it out.

Write the equation.

Write the solution.

Name \_\_\_\_\_

Peg and Tom like to jump in the pool. Peg jumped 7 times, Tom jumped 2 more times than Peg. How many jumps did Tom do?



Draw it out.

Write the equation.

Write the solution.

Peg and Tom like to play with puppets. Peg has 2 puppets. Tom has 5 more puppets than Peg. How many puppets does Tom have?



Draw it out.

Write the equation.

Write the solution.

Name \_\_\_\_\_

Sid and Nancy drink lots of milk with lunch. Sid had 6 milks. Nancy had 4 more milks than Sid. How many milks did Nancy Drink?




Draw it out.

Write the equation.

Write the solution.

There are 12 students in the class. Linc, Pete, and Julie went to help the gym teacher. How many students were left in the class?



Draw it out.

Write the equation.

Write the solution.

Name \_\_\_\_\_

Rose collects marbles in a jar. She has 7 red, 4 green and 5 blue. How many marbles does Rose have in her jar?




Draw it out.

Write the equation.

Write the solution.

Marc and Sara have lots of candy. Marc has 6 pieces, and Sara has 6 more than Marc. How many pieces of candy does Sara have?




Draw it out.

Write the equation.

Write the solution.

Name \_\_\_\_\_

There are 11 shapes all together. 6 are in the open treasure chest. Some shapes are in the one that is closed. How many shapes are in the closed treasure chest?



Draw it out.

Write the equation.

Write the solution.

Some of Mollie's friends are girls and 5 of her friends are boys. She has 15 friends. How many of Mollie's friends are girls?



Draw it out.


Write the equation.

Write the solution.



Name \_\_\_\_\_

Dave ate 14 cookies! He munched 9 of them plain. He dipped some of them in his milk. How many cookies did Dave dip in his milk?




Draw it out.

Write the equation.

Write the solution.

Some of the animals at the pet store were puppies, 5 of them were kittens, and 4 of them were birds. There were 12 animals all together. How many animals were puppies?



Draw it out.

Write the equation.

Write the solution.

Name \_\_\_\_\_

Jon opened a dog wash. He washed 3 dogs on Monday, 4 on Tuesday, and Five on Wednesday. How many pets has he washed so far?



Draw it out.

Write the equation.

Write the solution.

Carla helps Jon at the dog wash. She dried off 15 dogs. She dried 10 on Thursday and some on Friday. How many were on Friday ?



Draw it out.

Write the equation.

Write the solution.