

Who Has More?

How Many More?



Name _____

1. NBT.2 & 3

Who has more? Fill in the bubble. How Many More? Write in the box.



How Many More?



How Many More?



How Many More?



How Many More?



Name _____

1. NBT.2 & 3

Who has more? Fill in the bubble. How Many More? Write in the box.




How Many More?



How Many More?



How Many More?




How Many More?



Name _____

1. NBT.2 & 3

Who has more? Fill in the bubble. How Many More? Write in the box.



How Many More?



How Many More?



How Many More?



How Many More?



Name _____

1. NBT.2 & 3

Who has more? Fill in the bubble. How Many More? Write in the box.



How Many More?



How Many More?



How Many More?



How Many More?



Name _____

Find "How many more?" by Subtraction. Big number – Small number.

1. Bubble who has more.

2. Count and write.


3. Subtract to get the answer.



How many?

Bigger number Smaller number How many more?

$$\square - \square = \square$$



How many?




How many?

Bigger number Smaller number How many more?

$$\square - \square = \square$$




How many?




How many?

Bigger number Smaller number How many more?

$$\square - \square = \square$$




How many?



How many?

Bigger number Smaller number How many more?

$$\square - \square = \square$$



How many?

Name _____

Find "How many more?" by Subtraction. Big number – Small number.

1. Bubble who has more.

2. Count and write.

3. Subtract to get the answer.





How many?

How many?

Bigger number - Smaller number = How many more?







How many?

How many?

Bigger number - Smaller number = How many more?







How many?

How many?

Bigger number - Smaller number = How many more?





How many?

How many?

Bigger number - Smaller number = How many more?


Name _____


Find "How many more?" by Subtraction. Big number – Small number.

1. Bubble who has more.

2. Count and write.

3. Subtract to get the answer.

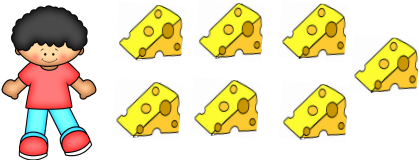





How many?

How many?

Bigger number - Smaller number = How many more?







How many?

How many?

Bigger number - Smaller number = How many more?







How many?

How many?

Bigger number - Smaller number = How many more?





How many?

How many?

Bigger number - Smaller number = How many more?

Name _____

1. NBT.2 & 3

Find "How many more?" by Subtraction. Big number – Small number.

1. Bubble which is more.

2. Count and write.

3. Subtract to get the answer.



How many?

Bigger number - Smaller number = How many more?



How many?



How many?

Bigger number - Smaller number = How many more?



How many?

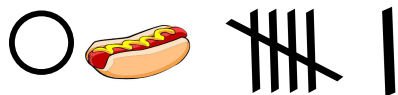


How many?

Bigger number - Smaller number = How many more?



How many?



How many?

Bigger number - Smaller number = How many more?



How many?